


Choose one or both of the sets of sums and work out all the answers.

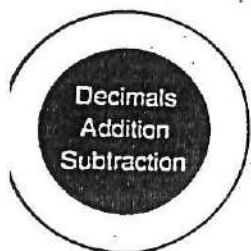
In the diagram opposite colour each area which contains one of the answers.

What do you see?



First Set


- | | |
|--------------------|---------------------|
| 1. $10 + 10.4 =$ | 14. $30.9 - 10.1 =$ |
| 2. $4 + 1.6 =$ | 15. $21.3 - 11.1 =$ |
| 3. $23.5 + 23.5 =$ | 16. $26.3 - 13.1 =$ |
| 4. $0.5 + 0.4 =$ | 17. $35.9 - 30.1 =$ |
| 5. $8.2 - 4.1 =$ | 18. $25.3 + 25.2 =$ |
| 6. $4.7 - 2.1 =$ | 19. $8.4 + 8.2 =$ |
| 7. $6.2 - 4.1 =$ | 20. $12.1 + 12.1 =$ |
| 8. $9.4 - 1.1 =$ | 21. $15.5 + 3.2 =$ |
| 9. $5.1 + 4.1 =$ | 22. $20 + 4.9 =$ |
| 10. $15.4 + 15 =$ | 23. $3.9 - 2.1 =$ |
| 11. $0.2 + 0.3 =$ | 24. $5.9 - 4.6 =$ |
| 12. $2.3 + 2.3 =$ | 25. $40 - 1.4 =$ |
| 13. $6.4 + 5.3 =$ | |



Choose one or both of the sets of sums and work out all the answers.

In the diagram opposite colour each area which contains one of the answers.

What do you see?



First Set

- | | |
|--------------------|---------------------|
| 1. $10 + 10.4 =$ | 14. $30.9 - 10.1 =$ |
| 2. $4 + 1.6 =$ | 15. $21.3 - 11.1 =$ |
| 3. $23.5 + 23.5 =$ | 16. $26.3 - 13.1 =$ |
| 4. $0.5 + 0.4 =$ | 17. $35.9 - 30.1 =$ |
| 5. $8.2 - 4.1 =$ | 18. $25.3 + 25.2 =$ |
| 6. $4.7 - 2.1 =$ | 19. $8.4 + 8.2 =$ |
| 7. $6.2 - 4.1 =$ | 20. $12.1 + 12.1 =$ |
| 8. $9.4 - 1.1 =$ | 21. $15.5 + 3.2 =$ |
| 9. $5.1 + 4.1 =$ | 22. $20 + 4.9 =$ |
| 10. $15.4 + 15 =$ | 23. $3.9 - 2.1 =$ |
| 11. $0.2 + 0.3 =$ | 24. $5.9 - 4.6 =$ |
| 12. $2.3 + 2.3 =$ | 25. $40 - 1.4 =$ |
| 13. $6.4 + 5.3 =$ | |



Puzzle Picture 7

Decimals
Addition
-Subtraction

